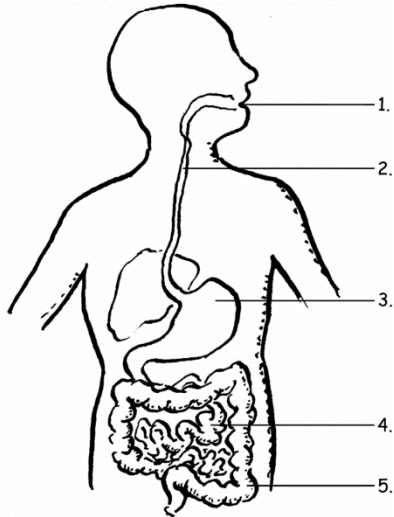


Grade 6 - 02.02.21

PEMD

1. What is digestion?
2. Complete the following diagram.



3. Briefly describe the purposes of the following organs.

a. mouth -

b. oesophagus -

c. stomach -

d. small intestines -

e. large intestines -

f. rectum -

g. rectum -

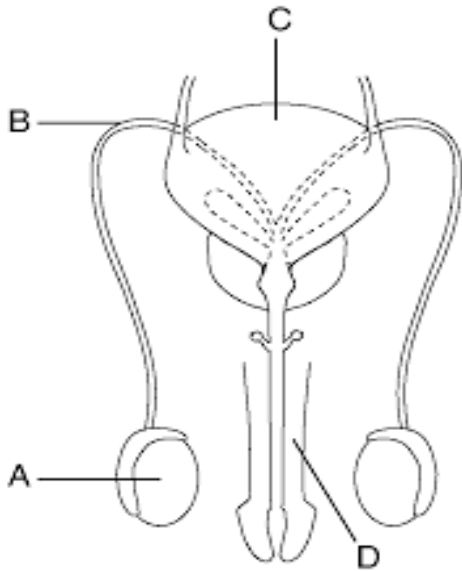
h. anus -

4. Give two reasons why the concept of digestion is important to a sportsperson?

5. Which foods would you recommend to a sportsperson and why?

Science and Technology

1. Complete the following diagram on male reproductive organs



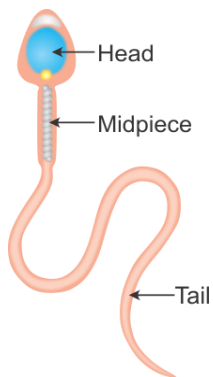
2a. Write one major function of the penis.

b. What is semen?

3 a. A structure that houses the testes is called the _____.

b. Briefly describe two functions of testes.

4 a. Name any two parts of a sperm.



b. Why are sperms important in human reproduction?

5. Describe two functions of the urethra.

